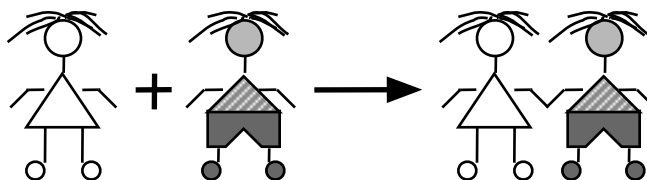


Types of Reactions: *A study in social interaction*

I.

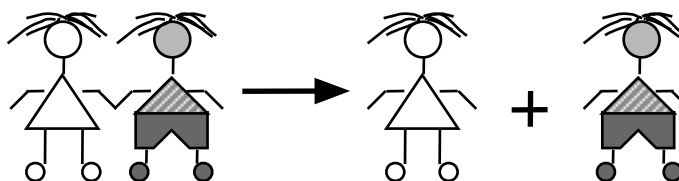


Describe the interaction shown above in your own words:

What is the proper chemical term for this kind of interaction? _____

Sample balanced chemical formulas that also show this interaction:

II.

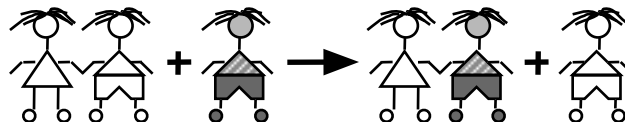


Describe the interaction shown above in your own words:

What is the proper chemical term for this kind of interaction? _____

Sample balanced chemical formulas that also show this interaction:

III.

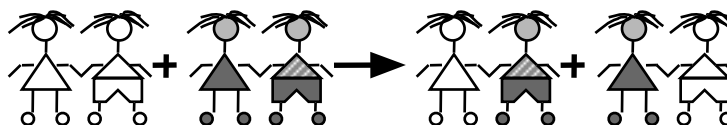


Describe the interaction shown above in your own words:

What is the proper chemical term for this kind of interaction? _____

Sample balanced chemical formulas that also show this interaction:

IV.

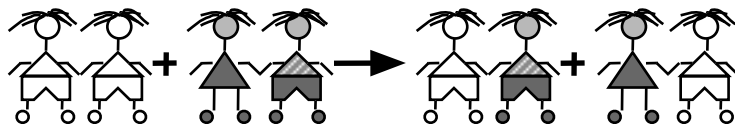


Describe the interaction shown above in your own words:

What is the proper chemical term for this kind of interaction? _____

Sample balanced chemical formulas that also show this interaction:

V.



Describe the interaction shown above in your own words:

What is the proper chemical term for this kind of interaction? _____

Sample balanced chemical formulas that also show this interaction: